

**MOUNT CARMEL INTERNATIONAL SCHOOL, AKOLA**  
**Cambridge International**



Formative Assessment: I

Subject: Science

Date: 29.08.2024

Student's Name: \_\_\_\_\_ Roll No: \_\_\_\_\_ Grade: 1

Marks: 25

Time Duration: 60 minutes

Invigilator's Sign.

**Q.1. Fill in the blanks.**

**(1)**

1. Rocks are \_\_\_\_\_ things because they do not grow, move, or need food.  
**(Living / Non- living)**





**Q.2. Why don't plants grow in caves? Tick the correct answer.**

**(1)**

1. There is too much sunlight.
2. There is no water in caves.
3. There is not enough sunlight.
4. The air in caves is too clean.

**Q.3. Pair each object with its corresponding property.**

**(2)**

1.  a. absorbent
2.  b. shiny
3.  c. waterproof
4.  d. transparent

**Q.4. Life processes are what we use to explain if something is living or not. Put each item in the list into the correct box in the table. (3)**


(Car, dog, fallen branch, glass, duckweed)

Living things	Non- living things


**Q.5. What part of a plant takes in water from the soil? Circle the correct answer. (1)**



**Q.6. Which of the following is made up of rocks? Circle the correct picture. (1)**



**Q.7. Draw a picture of a plant in the sun. Label the parts that help it use sunlight. (3)**



**Q.8. Metal is a soft material that can be easily bent. Write true or false. (1)**

\_\_\_\_\_

**Q.9. Name two objects made from wood. Why is wood a good material for these objects? (2)**

\_\_\_\_\_

**Q.10. If you wanted to make a car, which material would you choose? Explain why it is a good choice. (3)**

\_\_\_\_\_

**Q.11. Look and identify the pictures given below. (2)**



1. Which one is soft and can be compressed?

\_\_\_\_\_

2. Which one is hard cannot be easily changed in shape?

\_\_\_\_\_

**Q.12. Circle the odd one out. Give the reason for the same. (1)**



\_\_\_\_\_

**Q.13. Is a cloud a living thing? Circle the correct answer. (1)**

Yes / No

**Q.14. Draw a house and label the different materials used to make a house. (Any 3 materials name) (3)**

\*\*\*\*\*