



Cambridge Assessment
International Education



MOUNT CARMEL INTERNATIONAL SCHOOL, AKOLA
CAMBRIDGE PRIMARY IGCSE (TERM END Examinations-I)

Grade: 4

Subject: ICT

Date: 07.11.2024

Candidate Name: _____ **Roll Number:** _____

Max Marks: 35

Time Duration: 90 minutes

Invigilator's Sign:

SCRUTINY

Q1	Q11	Q21	Q31	Q41	Q51
Q2	Q12	Q22	Q32	Q42	Q52
Q3	Q13	Q23	Q33	Q43	Q53
Q4	Q14	Q24	Q34	Q44	Q54
Q5	Q15	Q25	Q35	Q45	Q55
Q6	Q16	Q26	Q36	Q46	Q56
Q7	Q17	Q27	Q37	Q47	Q57
Q8	Q18	Q28	Q38	Q48	Q58
Q9	Q19	Q29	Q39	Q49	Q59
Q10	Q20	Q30	Q40	Q50	Q60

Marks Obtained

35	15	50	Grade

Sub. Tr. Sign: _____

Q.1. Fill in the blanks with the help of the given words. (4)

(arrow, Clipboard, Taskbar, semicircle)

- The _____ displays the date and time on the right side.
- The copy and paste buttons are in the _____ group.
- The turtle will turn only 180 steps if you want to draw a _____.
- By default, the shape of the mouse pointer is a/an _____.

Q.2. State whether the following statements are true or false. (4)

- Usually the appearance of a mouse pointer is a cross. _____
- You can create a folder inside a folder. _____
- The picture folder is used to save videos. _____
- Voice recorder is a hardware. _____

Q.3. Tick (✓)the correct answers.

(4)

1. _____ provides options to customise appearance and functionality of the computer.
 - a. Customise button
 - b. desktop button
 - c. navigation button
2. Which of these combinations open File Explorer?
 - a. Windows Logo key + A.
 - b. Windows Logo key + C
 - c. Windows Logo key +E
3. The process of converting photograph into digital images is called _____.
 - a. Printing
 - b. Scanning
 - c. Recording
4. The command Repeat 6 [Fd 100 Rt 60] will draw a _____.
 - a. Hexagon
 - b. Pentagon
 - c. Octagon

Q.4. Guess the names of the following MSWLOGO commands.

(4)

1. It is used to bring the turtle back to non-erasing mode.

2. It erases the text in the Recall list box.

3. It is used to draw invisible lines.

4. It is used to print numbers and text on the main screen.

Q.5. Answer the following in one-word.

(4)

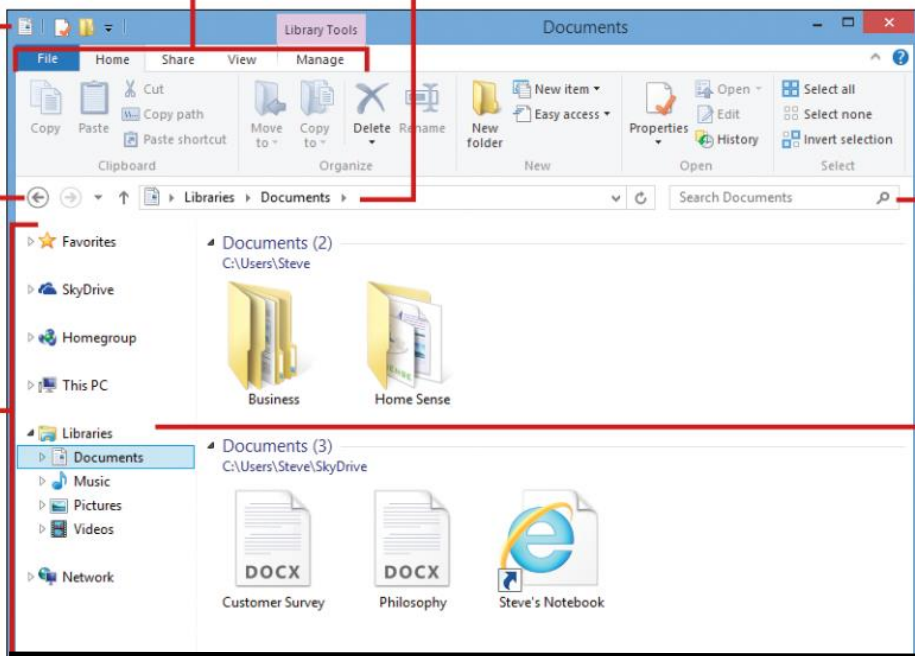

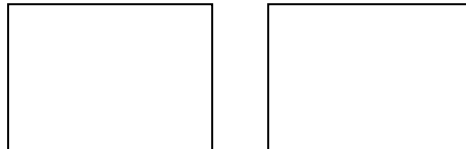
1. Words and graphics appear on this part of the computer.

2. A laptop has this instead of a handheld mouse.

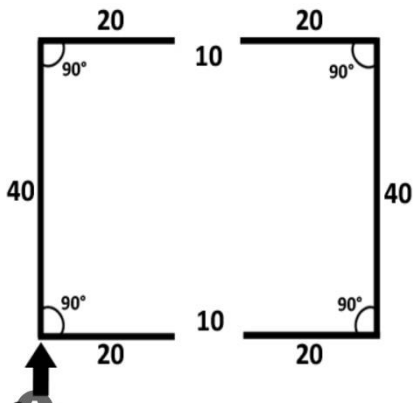
3. It is name of type of a scanner.

4. This is the first screen on the computer after the operating system is loaded.

Q.6. Write the names of the components of the File explorer window. (2)



Q.7. Write the commands for the following picture. (3)



1. _____

2. _____

3. _____

4. _____

5. _____

6. _____

7. _____

8. _____

9. _____

10. _____

11. _____

12. _____

13. _____

14. _____

15. _____

16. _____

17. _____

18. _____

Q.8. Write the difference between the following. (Any3)

(6)

1. A wallpaper and a screensaver.

2. Scanner and a printer.

3. Copying and moving a folder / file.

4. Regular and irregular polygons.

Q.9. Answer the following questions.

(4)

1. Which part of the desktop screen display the date and time and where?

2. Explain the use of repeat command with an example.

3. Write the names of any two-application software and write their functions.

4. What do you understand by computer peripherals?
