



Cambridge Assessment  
International Education



**MOUNT CARMEL INTERNATIONAL SCHOOL, AKOLA**  
**CAMBRIDGE PRIMARY IGCSE (TERM END Examinations-I)**

Grade: 3

Subject: Social Studies

Date: 13.11.2024

Candidate Name: \_\_\_\_\_ Roll Number: \_\_\_\_\_

Max Marks: 40

Time Duration: 90 minutes

Invigilator's Sign: \_\_\_\_\_

**SCRUTINY**

Q1	Q11	Q21	Q31	Q41	Q51
Q2	Q12	Q22	Q32	Q42	Q52
Q3	Q13	Q23	Q33	Q43	Q53
Q4	Q14	Q24	Q34	Q44	Q54
Q5	Q15	Q25	Q35	Q45	Q55
Q6	Q16	Q26	Q36	Q46	Q56
Q7	Q17	Q27	Q37	Q47	Q57
Q8	Q18	Q28	Q38	Q48	Q58
Q9	Q19	Q29	Q39	Q49	Q59
Q10	Q20	Q30	Q40	Q50	Q60

**Marks Obtained**

40	10	50	Grade

Sub. Tr. Sign: \_\_\_\_\_

**Section A**

**Q.1. Identify the names of the leaders who coined the following famous slogans. Hints are given in the bracket. (4)**

**(Subhash Chandra Bose, Bankim Chandra Chattopadhyay, Mahatma Gandhi, Bhagat Singh).**

1. Vande Mataram - \_\_\_\_\_
2. Jai Hind - \_\_\_\_\_
3. Do or die - \_\_\_\_\_
4. Inquilab Zindabad - \_\_\_\_\_

**Q.2. Answer the following questions. (Any 3) (6)**

1. How can archaeology help us learn about history?

\_\_\_\_\_

\_\_\_\_\_

---

---

---

2. What are coins used for besides buying things?

---

---

---

---

---

3. Apart from education, in what other ways did Savitribai Phule contribute to social reforms?

---

---

---

---

---

4. List some important movements launched under the leadership of Mahatma Gandhi.

---

---

---

---

---

**Q.3. Match the pairs.**

**(4)**

- |                             |                          |
|-----------------------------|--------------------------|
| 1. Oral source              | a. Foreign accounts      |
| 2. Material source          | b. Folk tales            |
| 3. Sardar Vallabhbhai Patel | c. Coins                 |
| 4. Written source           | d. The iron man of India |

**Q.4 Identify the Leaders given in the brackets with the help of the hints given below. Write the correct option Infront of the question.**

**(3)**

**(Mahatma Gandhi, Lal Bahadur Shastri, Mangal Pandey)**

1. The leader who coined the slogan "Jai Jawan, Jai Kisan." \_\_\_\_\_
2. Famous for his role in sparking the Sepoy Mutiny of 1857, an early rebellion against British rule. \_\_\_\_\_
3. Famous for his leadership in the Quit India Movement and his call for "Do or Die." \_\_\_\_\_

**Section B**

**Q.5. Tick the correct option.**

**(4)**

1. Which of the following is a 3D model of the earth?  
a. Globe                      b. map                      c. index                      d. scale
2. What causes the change in seasons on the Earth?  
a. The tilt of the Earth's axis                      c. Changes in the Sun's brightness  
b. The rotation of the moon                      d. Movement of the planets
3. Which of these activities is typically done during the daytime?  
a. Sleeping                      b. Playing outside                      c. Watching stars                      d. Having dinner
4. Identify the instrument in the given image



- |            |        |              |          |
|------------|--------|--------------|----------|
| a. Compass | b. Map | c. barometer | d. globe |
|------------|--------|--------------|----------|

5. What is the book of maps called as?

- a. Encyclopaedia      b. Novel      c. Atlas      d. Handbook

6. Which type of maps shows us physical features like mountains, seas, rivers, lakes and farms

- a. Political map      b. Thematic map      c. Physical map

7. In which direction does the sun rise?

- a. West      b. South      c. East      d. North

**Q.6. Answer the following questions. (Any 2)**

**(6)**

1. Why does it get dark at night? Draw a picture to explain.

---

---

---

---

2. Draw any three signs and symbols used in a map and state what they represent.

---

---

---

---

3. Write the difference between globe and map.

---

---

---

---


---

---


Q.7. Complete the given activity.

(4)


Directions: Look at the earth on its axis in each picture below. Write whether the area with the X is experiencing daytime or nighttime.



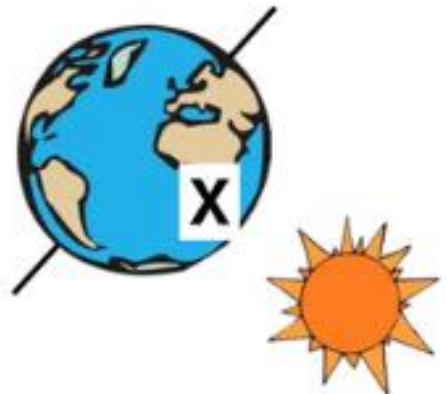
---



---



---



---

**Section C**

**Q.9. Unscramble the letters to find the correct national symbols. (4)**

- 1. CEKOYH (National Game) - \_\_\_\_\_
- 2. RIOUCTR (National Flag) - \_\_\_\_\_
- 3. NAAYBNA (National tree) - \_\_\_\_\_
- 4. NGOMA (National fruit) - \_\_\_\_\_

**Q.10. Explain the quality of lotus that makes it so special. (2)**

---

---

---

---

---

---

---

---

---

---

\*\*\*\*\*