



Cambridge Assessment
International Education



MOUNT CARMEL INTERNATIONAL SCHOOL, AKOLA
CAMBRIDGE PRIMARY IGCSE (TERM END Examinations-I)

Grade: 1

Subject: Science

Date: 12.11.2024

Candidate Name: _____ Roll Number: _____

Max Marks: 40

Time Duration: 90 minutes

Invigilator's Sign: _____

SCRUTINY											
Q1		Q11		Q21		Q31		Q41		Q51	
Q2		Q12		Q22		Q32		Q42		Q52	
Q3		Q13		Q23		Q33		Q43		Q53	
Q4		Q14		Q24		Q34		Q44		Q54	
Q5		Q15		Q25		Q35		Q45		Q55	
Q6		Q16		Q26		Q36		Q46		Q56	
Q7		Q17		Q27		Q37		Q47		Q57	
Q8		Q18		Q28		Q38		Q48		Q58	
Q9		Q19		Q29		Q39		Q49		Q59	
Q10		Q20		Q30		Q40		Q50		Q60	

Marks Obtained			
40	10	50	Grade

Sub. Tr. Sign: _____

Q.1. Choose the correct option and fill in the blank. (1)

1. Leaves are very important as they make _____ for the plant.
(food/water)

Q.2. Animals can move from one place to another. Write True or False. (1)

Q.3. Name the part that absorbs water and nutrients from the soil. (1)

Q.4. Complete the following words. (2)

1. Plants grow towards the S _____ g _____.
2. Seeds grow into P _____.

Q.5. Match the plant parts with their functions.

(4)

Parts

Function



a. produce seeds.



b. makes food using sunlight.



c. absorbs water and nutrients.



d. holds the plant up.

Q.6. Look at the given objects. Write which objects can be stretched. Circle the correct objects.

(1)



Q.7. Unscramble the given letters to find the words. Use the given clues.

(3)

1. LPSCIAT _____



2. DOWO _____



3. OCKR _____



Q.8. Name a material that can be used to make a water bottle. Name two properties of the material. (3)

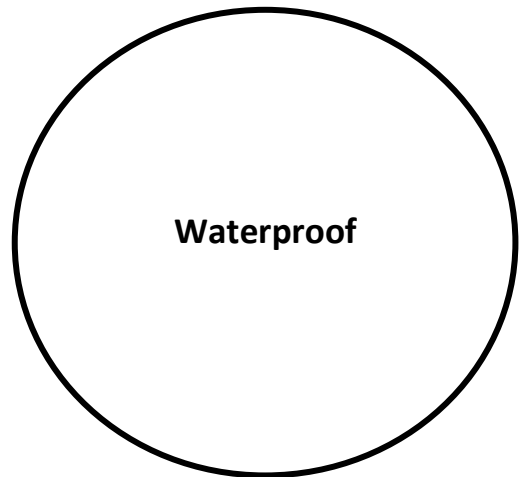
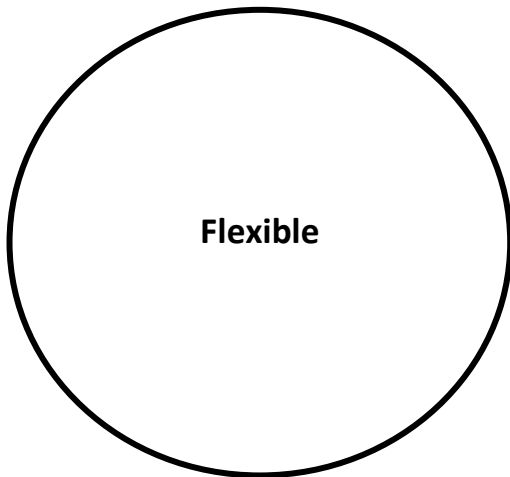
Material: _____

Properties:

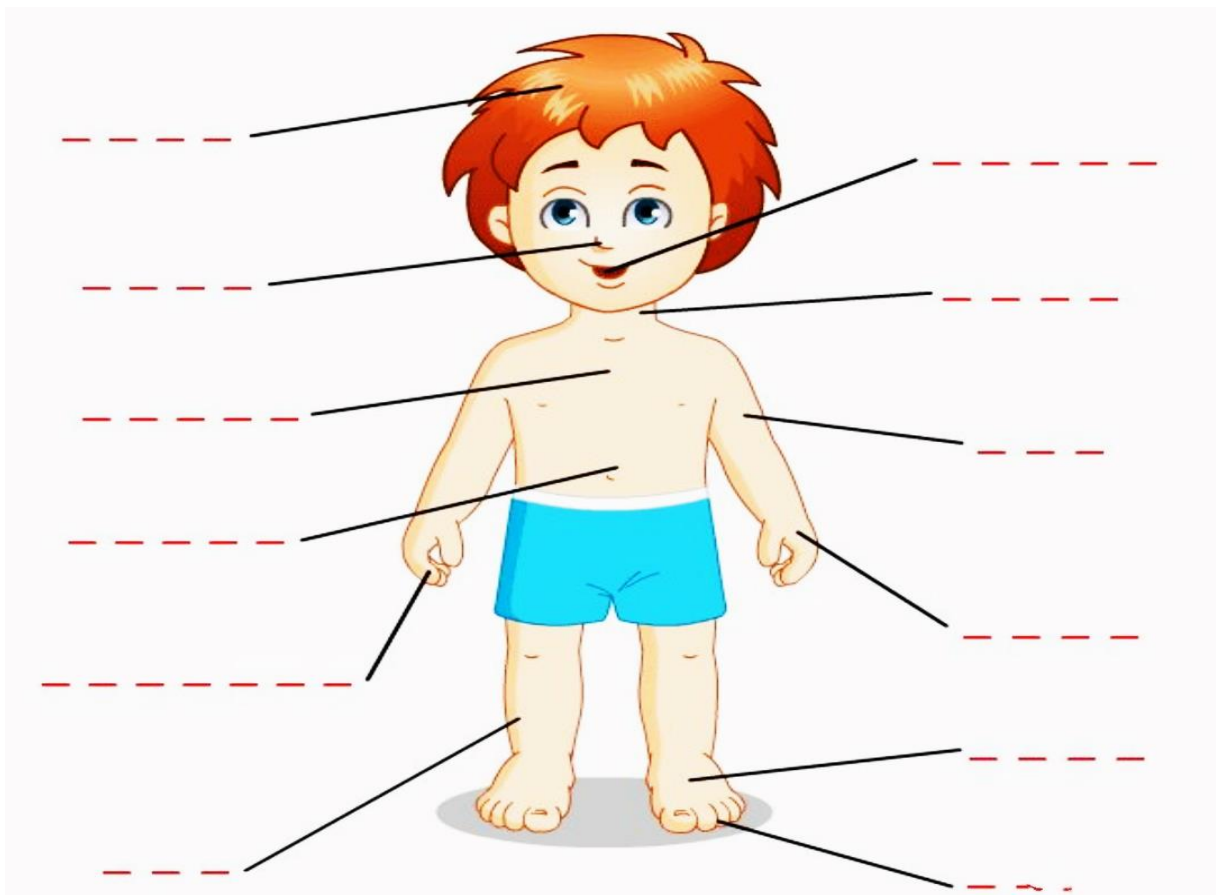
1. _____

2. _____

Q.9. Name one material for each property. (2)



Q.10. Label the different body parts. (At least 5) (5)



Q.11. Circles three body parts that can be found on our face. (3)

Ears elbow finger legs mouth nose

- a. Which parts of our body helps us to run? _____
- b. Which is the largest body part? _____

Q.12. Cross out the sense that helps us to describe these things. (1)

Hearing sight smell taste



Q.13. Read the given clues and unscramble the letters which gives the name of an internal body part. (2)

1. I pump blood all day and night, to keep your body feeding right. What am I?

E R H A T _____

2. I am like a sponge, but I help you think, I sit inside your head, quick as a wink. I help you remember and dream in bed. What am I?

N R I A B _____

Q.14. Circle odd one out and also give a reason for the same. (4)

1. Brain, heart, leg. _____
2. Eyes, taste, nose. _____

Q.15. Challenge questions. (2)

1. Why is it important to drink water every day?

2. Why do humans need food?

Q.16. Draw a picture of a plant being watered. Label the parts that takes in water. (3)



Q.17. Think and draw an object that you have in your bedroom. Write the name of the material it is made of. (2)

