

MOUNT CARMEL INTERNATIONAL SCHOOL, AKOLA
Cambridge International



Formative Assessment: I

Subject: Mathematics

Date: 13.09.2024

Student's Name: _____ Roll No: _____ Grade: 1

Marks: 25


Time Duration: 50 minutes

Invigilator's Sign.

Q.1. ☆☆☆☆☆☆☆ (2)

Estimate: Count:

Q.2. Circle the domino with 0 spot. (1)



Q.3 Write the missing numbers. (2)

1			4		6			9	
11		13		15		17			20

Q.4 Write greater/fewer: (2)

a. 19 is _____ than 12

b. 8 is _____ than 16

Q.5. Write the number names of the following: (2)

a. 5 = _____

b. 12 = _____

Q.6. Draw a ring around the number. (2)


9 - odd / even

12 - odd / even

Q.7. Add using the tens frame: (2)

a. 3 add 4 equals

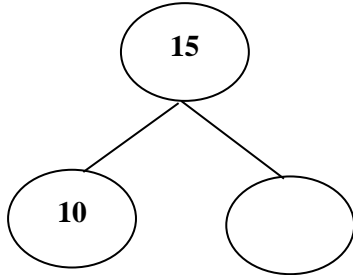
Q.8. Estimate: (2)



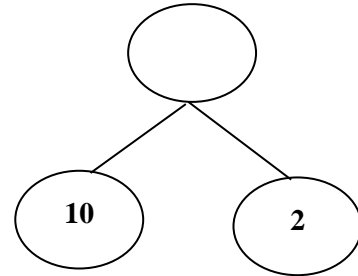
+ =

Q.9 Complete each part- whole diagram: (2)

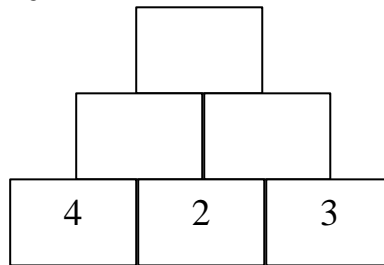
1.



2.



Q.10. Complete the Addition wall: (2)

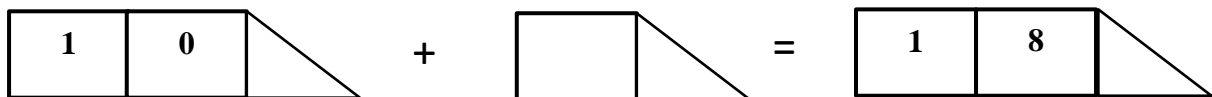


Q.11. Solve: 5 take away 1 equal (2)

0	0	0	0	0

Q.12. From 20 which is the 3rd teen number. (1)

Q.13. Which place value cards is used to make each number. (1)



Q.14. Write the missing numbers. (2)

