

MOUNT CARMEL INTERNATIONAL SCHOOL, AKOLA



Cambridge International

Term End Exam - II

Subject: Social Studies

Date: 10.04.2024

Student's Name: _____ Roll No: ____ Grade: 3

Marks: 40

Time Duration: 70 minutes

Invigilator's Sign.

Q.1. Read the given details of the Indian flag and answer the following questions: (5)

Our national flag is the tricolour, fondly known as tiranga. The Saffron band at the top symbolises courage and sacrifice. The white band in the middle symbolises honesty, purity and peace. The green band at the bottom represents prosperity. There is a navy-blue wheel in the centre with 24 spokes. It is called the Ashoka Chakra. It Symbolises righteousness.

1. Which colour is at the top of the flag? _____
2. Honesty, Purity and Peace are represented by which colour? _____
3. The green band at the bottom represents _____
4. What is the colour of Ashoka Chakra? _____
5. How many spokes does the chakra have? _____

Q.2. Write a few lines about your favourite festival.


(2)

Q.3. Look at the national emblem of India carefully. Notice that there are some animals displayed on it. Identify the animals and write them in the space given below: - (Any 2) (2)

1. _____
2. _____
3. _____
4. _____



Q.4. Look at the picture of the solar system and answer the following questions. (5)



1. Name the last planet of the solar system.

2. How many planets make our solar system?

3. Is the moon satellite of the Earth?

4. Name the planet nearest to the Sun.

5. Name the largest planet in the solar system.

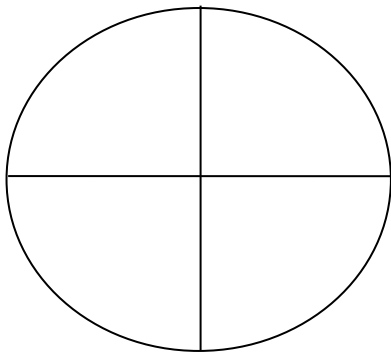
Q.5. Sort the following festivals in the correct group: - (2)
(Diwali, Eid-UI-Fitr, Republic Day, Independence Day, Gurupurab, Onam, Gandhi Jayanti, Pongal, Bihu)

National Festivals

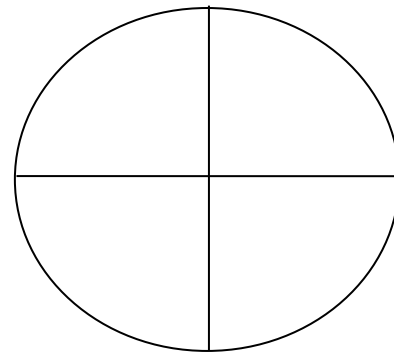
Religious Festivals

Harvest Festivals

Q.6. Read and shade the fraction in the shapes. (With Pencil) (2)



$\frac{3}{4}$ of the Earth is covered with water.



$\frac{1}{4}$ of the Earth is covered by land.

Q.7. Answer the following in one line: - (5)

1. What does the solar system consist of?

2. Name the three main types of map.

3. What makes our environment?

4. What are the different types of pollution?

5. What is atmosphere made up of?

Q.8. Answer the following in one word: -

(5)

1. The sun rises in the _____
2. The round model of the earth is called _____
3. The physical map shows _____ and _____
4. The map that shows us the special features of an area is _____
5. The very large map hanged on the wall are _____

Q.9. Answer in two three lines: -

(4)

1. Write two human activities that pollute water.

2. Write two human activities that pollute the air.

Q.10. Look at the map of India and mark the following place and the cardinal directions. (3)

1. Rajasthan

2. Maharashtra

3. West Bengal

Q.11. Write three points how we can save our environment?

(3)

Q.12. Write the difference between map and globe.

(2)
